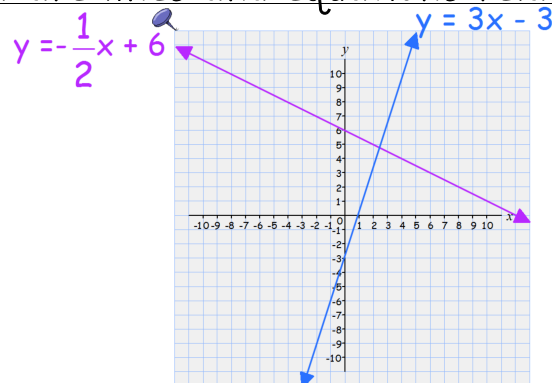


Name: \_\_\_\_\_

Algebra I

## Slope Intercept Notes Page

How are lines and equations related?



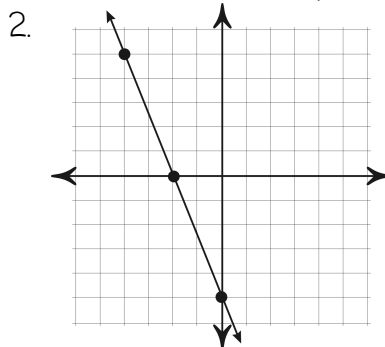
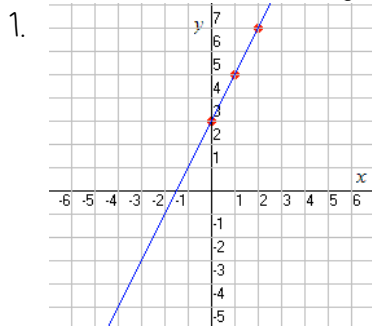
Slope Intercept Form:

Part One: Identifying Slope and Y-intercept

1.  $y = 0.5x - 3$

2.  $-4x + 5y = -10$

Part Two: Writing an Equation from a Graph



Steps:

Part Three: Graphing an Equation

1.  $y = -6x + 3$

