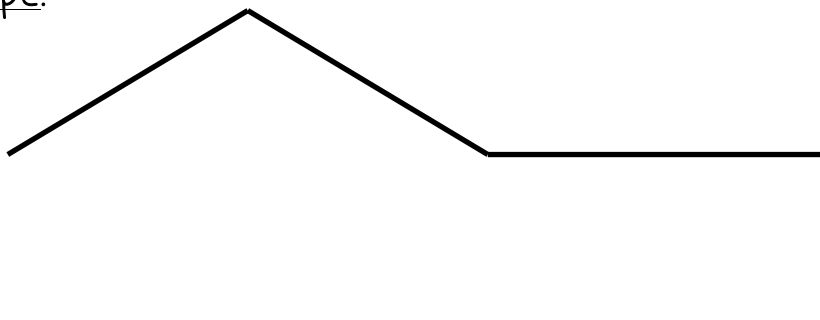


Name: _____

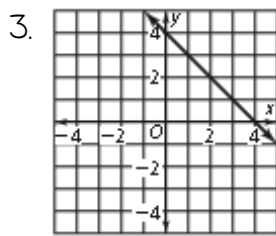
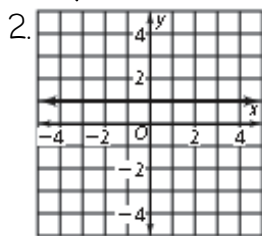
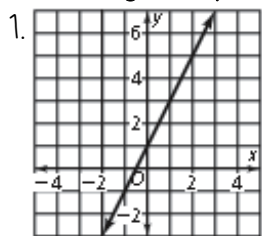
Algebra I

Slope Notes Page

Four Types of Slope:



Finding Slope on a Graph:



Formula:

Finding Slope Given Two Points:

4. $(2, 1), (-3, 4)$

5. $(4, -5), (6, 2)$

Formula: